


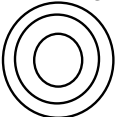



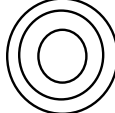
B	P=___ N=___ E=___	O S O L O G
	M.P. = ___ B.P. = ___	
Properties		
Uses		
Bohr Diagram Lewis Structure		
	B	


H	P=___ N=___ E=___	O S O L O G
	M.P. = ___ B.P. = ___	
Properties		
Uses		
Bohr Diagram Lewis Structure		
	H	

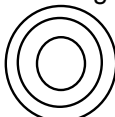
O	P=___ N=___ E=___	O S O L O G
	M.P. = ___ B.P. = ___	
Properties		
Uses		
Bohr Diagram Lewis Structure		
	O	


P	P=___ N=___ E=___	O S O L O G
	M.P. = ___ B.P. = ___	
Properties		
Uses		
Bohr Diagram Lewis Structure		
	P	

C	P=___ N=___ E=___	O S O L O G
	M.P. = ___ B.P. = ___	
Properties		
Uses		
Bohr Diagram Lewis Structure		
	C	

Mg	P=___ N=___ E=___	O S O L O G
	M.P. = ___ B.P. = ___	
Properties		
Uses		
Bohr Diagram Lewis Structure		
	Mg	

F	P=___ N=___ E=___	O S O L O G
	M.P. = ___ B.P. = ___	
Properties		
Uses		
Bohr Diagram Lewis Structure		
	F	

Ar	P=___ N=___ E=___	O S O L O G
	M.P. = ___ B.P. = ___	
Properties		
Uses		
Bohr Diagram Lewis Structure		
	Ar	

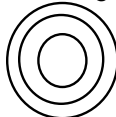
He	P=___ N=___ E=___	O S O L O G
	M.P. = ___ B.P. = ___	
Properties		
Uses		
Bohr Diagram Lewis Structure		
	He	

Al	P=___	O S
	N=___	O L
	E=___	O G
M.P. = ___		
B.P. = ___		

Properties

Uses

Bohr Diagram Lewis Structure



Al

N	P=___	O S
	N=___	O L
	E=___	O G
M.P. = ___		
B.P. = ___		

Properties

Uses

Bohr Diagram Lewis Structure



N

S	P=___	O S
	N=___	O L
	E=___	O G
M.P. = ___		
B.P. = ___		

Properties

Uses

Bohr Diagram Lewis Structure



S

Li	P=___	O S
	N=___	O L
	E=___	O G
M.P. = ___		
B.P. = ___		

Properties

Uses

Bohr Diagram Lewis Structure

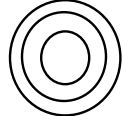

Li

Si	P=___	O S
	N=___	O L
	E=___	O G
M.P. = ___		
B.P. = ___		

Properties

Uses

Bohr Diagram Lewis Structure



Si

Be	P=___	O S
	N=___	O L
	E=___	O G
M.P. = ___		
B.P. = ___		

Properties

Uses

Bohr Diagram Lewis Structure



Be

Na	P=___	O S
	N=___	O L
	E=___	O G
M.P. = ___		
B.P. = ___		

Properties

Uses

Bohr Diagram Lewis Structure



Na

Ne	P=___	O S
	N=___	O L
	E=___	O G
M.P. = ___		
B.P. = ___		

Properties

Uses

Bohr Diagram Lewis Structure



Ne

Cl	P=___	O S
	N=___	O L
	E=___	O G
M.P. = ___		
B.P. = ___		

Properties

Uses

Bohr Diagram Lewis Structure


Cl